

UNIVERSITY OF GRETAER MANCHESTER

SCHOOL OF ENGINEERING

B.ENG (HONS) BIOMEDICAL ENGINEERING

SEMESTER 2 EXAMINATIONS - 2023/2024

MEDICAL SENSORY DEVICES & MEASUREMENT

MODULE NO: BME4004

Date: Thursday 15 May 2025

Time: 10:00 - 12:00

INSTRUCTIONS TO CANDIDATES:

There are FIVE questions.

Answer ANY FOUR questions.

All questions carry equal marks.

Marks for parts of questions are shown in brackets.

Electronic calculators may be used provided that data and program storage memory is cleared prior to the examination.

CANDIDATES REQUIRE:

Formula Sheet (attached).

School of Engineering
B.Eng. (Hons) Biomedical Engineering
Semester 2 Examination 2024/25
Medical Sensory Devices & Measurement
Module Number: BME4004

Question 1

- a) A straight wire carries a current of 20 A. What is the magnetic field strength H at a distance of 50 mm from the wire? **[5 marks]**
- b) A $400\ \mu\text{C}$ charge is available in a 100 V capacitor. What is its capacitance value in μFarads **[5 marks]**
- c) What is the capacitive reactance of a $200\ \mu\text{F}$ capacitor working on 200 Hz? **[5 marks]**
- d) A 20 A. current flows through a 200-turn coil.
 - i) What is the value of the magnetic motive force produced by this coil? **[4 marks]**
 - ii) What is the inductance of this coil with an air core? **[4 marks]**
 - iii) What is its inductance with an iron core of relative permeability=1000? **[2 marks]**

Assume the ratio of coil area to its length is 4.

Total 25 marks

Please turn the page

School of Engineering
B.Eng. (Hons) Biomedical Engineering
Semester 2 Examination 2024/25
Medical Sensory Devices & Measurement
Module Number: BME4004

Question 2

Fig.1 shows an RLC series circuit.

(a) Determine the values of:

- The circuit impedance Z [5 marks]
- The circuit current I [3 marks]
- The phase difference between the supply voltage and the circuit current θ

[3 marks]

(b) Is the circuit inductive or capacitive using the voltage phasor diagram

[5 marks]

(c) Calculate the resonant frequency of the circuit and the peak current flowing in the circuit at the resonant frequency [9 marks]

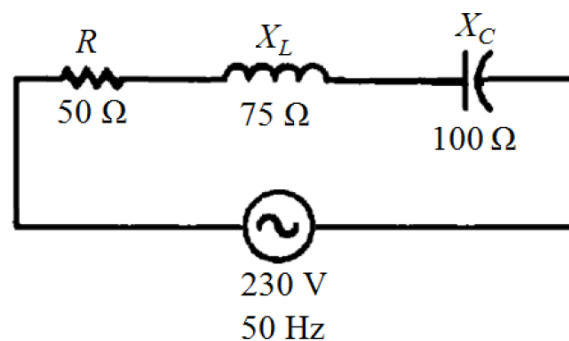


Fig.1 RLC series circuit

Total 25 marks

Please turn the page

School of Engineering
B.Eng. (Hons) Biomedical Engineering
Semester 2 Examination 2024/25
Medical Sensory Devices & Measurement
Module Number: BME4004

Question 3

(a) A resistive circuit is shown in Fig.2

(i) Explain Thevenin's and Norton's Theorems.

[4 marks]

(ii) Determine Thevenin's and Norton's equivalent circuits.

[6 marks]

(b) For the circuit shown in Fig.2 below, Find:

(i) the current across R_{Load}

[9 marks]

(ii) the current flowing through the R_2 resistor

[6 marks]

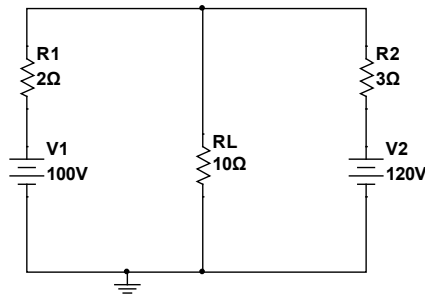


Fig.2

Total 25 marks

Please turn the page

School of Engineering
B.Eng. (Hons) Biomedical Engineering
Semester 2 Examination 2024/25
Medical Sensory Devices & Measurement
Module Number: BME4004

Question 4

- (a) A single-phase transformer of rated power 200VA has a turns ratio (N_1/N_2) of 10:1 (step down) and is connected to a supply main of 200 V@50Hz, Determine
- (i) its secondary voltage **[3 marks]**
 - (ii) its primary and secondary currents **[4 marks]**
- (b) The alternating voltage shown in Fig 3, is connected across a resistor of 10 k Ω . Calculate
- i) the r.m.s. current, **[4 marks]**
 - ii). The frequency, **[5 marks]**
 - iii). The mean power dissipated in the resistor. **[5 marks]**

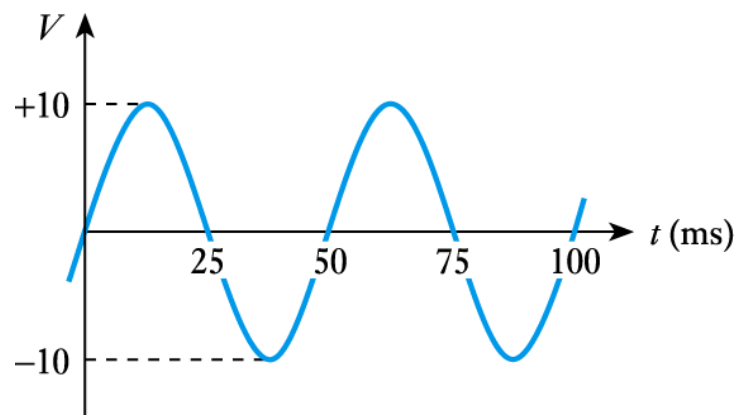


Fig 3.

- (c) Derive the instantaneous equation that predicts the waveform in Fig 3 and calculate the value when $t = 1.25$ ms.

[4 marks]

Total 25 marks

Please turn the page

School of Engineering
B.Eng. (Hons) Biomedical Engineering
Semester 2 Examination 2024/25
Medical Sensory Devices & Measurement
Module Number: BME4004

Question 5

- (a) Explain with the assistance of diagrams the operation of a Wheatstone bridge circuit as a resistive sensor **[6 marks]**
- (b) Describe the generalized medical instrumentation system. Illustrate your answer with the aids of diagrams **[7 marks]**
- (c) What are the main types of transducers used in biomedical instruments **[4 marks]**
- (d) What are the basic components of a DC power supply used in biomedical equipment assuming the mains is AC power supply. What is the function of a bridge rectifier and how can we improve the quality of the DC output voltage? Illustrate your answer with the aid of diagrams **[8 marks]**

Total 25 marks

End of questions

Please turn the page for the Formula Sheet

School of Engineering
B.Eng. (Hons) Biomedical Engineering
Semester 2 Examination 2024/25
Medical Sensory Devices & Measurement
Module Number: BME4004

Formula sheet

These equations are given to save short-term memorisation of details of derived equations and are given without any explanation or definition of symbols; the student is expected to know the meanings and usage.

Ohm's law: $V = IR$, Power: $P = IV$, Magnetic flux: $\Phi = BA$, Induced voltage: $V = N \cdot \Delta\Phi/\Delta t$

$$\mu_o = 4\pi \times 10^{-7} \text{ H/m}, \epsilon_o = 8.85 \times 10^{-12} \text{ F/m}$$

$$H = \frac{NI}{l}$$

$$L = \frac{\mu_o \mu_r AN^2}{l}$$

$$v_L = L \cdot \frac{di_L}{dt}$$

$$i_C = C \frac{dv_C}{dt}$$

$$f = \frac{pn}{120}$$

$$\text{Transformer voltage ratio: } \frac{V_1}{V_2} = \frac{N_1}{N_2}$$

$$\text{Magnitude of the Reactance of Inductor } L: X_L = 2\pi fL$$

$$\text{Magnitude of the Reactance of Capacitor } C: X_C = \frac{1}{2\pi fC}$$

$$\text{Pythagorean Theorem: } c^2 = a^2 + b^2$$

Tangent function: $\tan\theta = \text{opposite/adjacent}$

Multiply the Value	By	To Get the Value
Peak	2	Peak-to-peak
Peak-to-peak	0.5	Peak
Peak	0.637	Average
Average	1.570	Peak
Peak	0.707	RMS (effective)
RMS (effective)	1.414	Peak
Average	1.110	RMS (effective)
RMS (effective)	0.901	Average

Please turn the page

School of Engineering
 B.Eng. (Hons) Biomedical Engineering
 Semester 2 Examination 2024/25
 Medical Sensory Devices & Measurement
 Module Number: BME4004

Summary Table for Series and Parallel RC Circuits

X_C and R in Series	X_C and R in Parallel
I the same in X_C and R $V_T = \sqrt{V_R^2 + V_C^2}$ $Z = \sqrt{R^2 + X_C^2} = \frac{V_T}{I}$ V_C lags V_R by 90° $\theta = \arctan\left(-\frac{X_C}{R}\right)$	V_T the same across X_C and R $I_T = \sqrt{I_R^2 + I_C^2}$ $Z_T = \frac{V_T}{I_T}$ I_C leads I_R by 90° $\theta = \arctan \frac{I_C}{I_R}$

Summary Table for Series and Parallel RL Circuits

X_L and R in Series	X_L and R in Parallel
I the same in X_L and R $V_T = \sqrt{V_R^2 + V_L^2}$ $Z = \sqrt{R^2 + X_L^2} = \frac{V_T}{I}$ V_R lags V_L by 90° $\theta = \arctan \frac{X_L}{R}$	V_T the same across X_L and R $I_T = \sqrt{I_R^2 + I_L^2}$ $Z_T = \frac{V_T}{I_T}$ I_L lags I_R by 90° $\theta = \arctan\left(-\frac{I_L}{I_R}\right)$

END OF EXAM